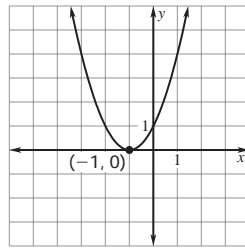


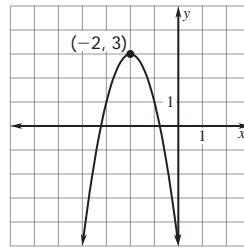
Answer Key

Reteaching with Practice

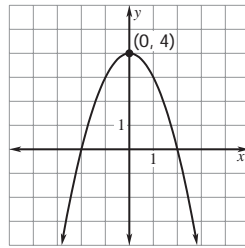
1.



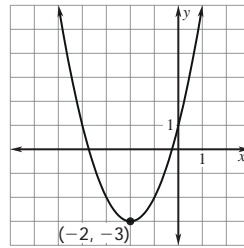
2.



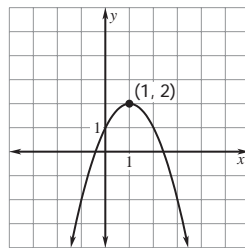
3.



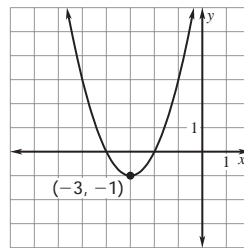
4.



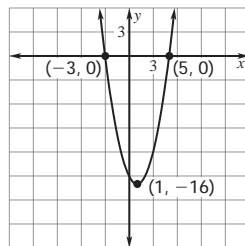
5.



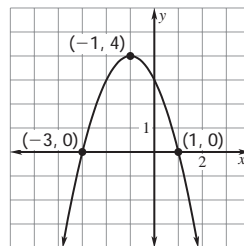
6.



7.



8.



9. $y = x^2 + 2x - 7$ 10. $y = -4x^2 + 16$