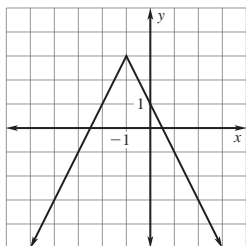


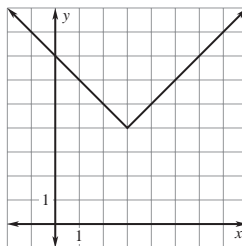
Answer Key

Reteaching with Practice

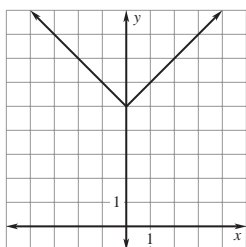
1.



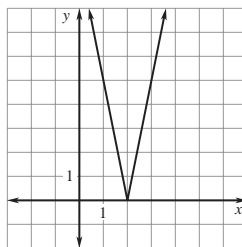
2.



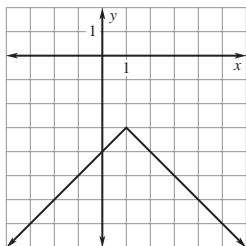
3.



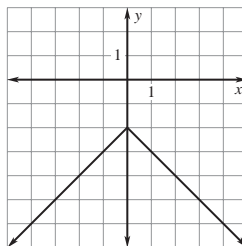
4.



5.



6.



7. $y = -\frac{3}{2}|x - 3|$ 8. $y = |x - 1| - 2$

9. $y = -4|x + 2| + 2$